

功课和练习

第1-1课

加法策略

再看! You can count on to find a sum. Counting on from a greater number is easier.

I can add numbers in any order and get the same sum.



5 6 7



2 3 4 5 6 7

$$5 + 2 = 7$$

$$2 + 5 = 7$$

家庭活动 Have your child use small clothing items, such as socks or mittens, to model counting on to find $5 + 4$. Then ask your child to explain why $5 + 4$ and $4 + 5$ have the same sum.



Count on to find the sum. Then change the order of the addends.

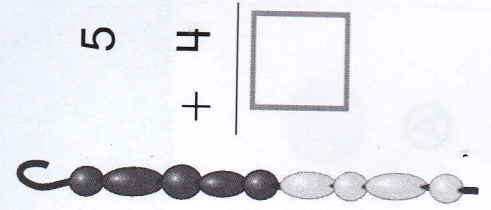


$$3 + 4 = \underline{\quad}$$

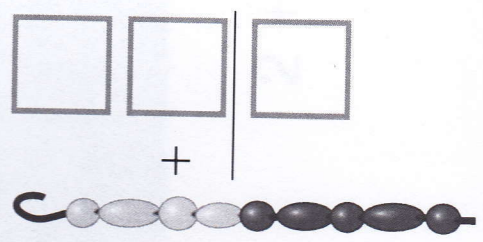


$$\underline{\quad} + \underline{\quad} = \underline{\quad}$$

2.



$$\begin{array}{r} 5 \\ + 4 \\ \hline \square \end{array}$$



$$\begin{array}{r} \square \\ + \square \\ \hline \square \end{array}$$

3.

$$7 + 6 = \underline{\quad}$$



$$\underline{\quad} + \underline{\quad} = \underline{\quad}$$

数学练习和解决问题

解答下面的题目。

13. © MP.4 展示 Joy 的花园里有 8 棵豆子植物和 6 棵玉米植物。她一共有几棵植物？画图。

然后把加数用不同顺序的做数学算式。

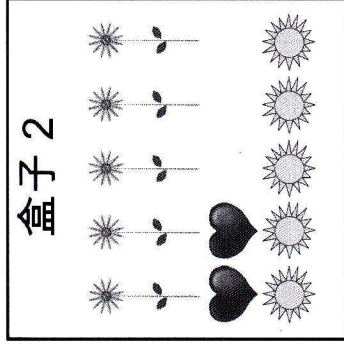

$$\underline{\quad} + \underline{\quad} = \underline{\quad}$$

$$\underline{\quad} + \underline{\quad} = \underline{\quad}$$

用你的
图和数学算式来显
示问题。



14. 进阶思维 找出盒子 1 和 盒子 2 的相同物件。写数学算式来展示有多少物件。然后更改加数的顺序。



$$\begin{aligned} \text{heart} + \text{heart} &= \underline{\quad} + \underline{\quad} = \underline{\quad} \\ \text{sun} + \text{sun} &= \underline{\quad} + \underline{\quad} = \underline{\quad} \\ \text{sprout} + \text{sprout} &= \underline{\quad} + \underline{\quad} = \underline{\quad} \end{aligned}$$

15. © 评估 Kate 有 7 条鱼. Nick 有 5 条鱼。Kate 和 Nick 一共有多少条鱼？哪一个答案是用继续数来解决问题？

- Ⓐ 7, 8, 9, 10, 11, 12
 Ⓑ 1, 2, 3, 4, 5
 Ⓒ 7 - 5
 Ⓓ 7, 8, 9, 10, 11