

功课和练习

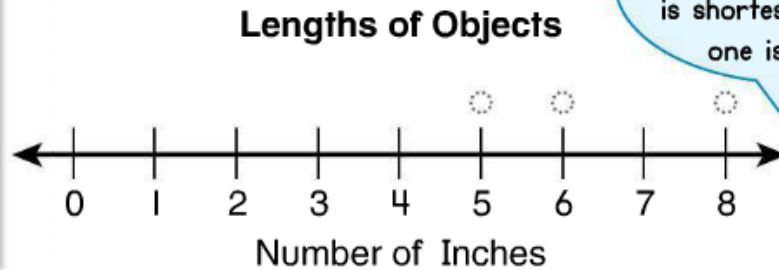
第14-1课

数据线

再看！ You can make a line plot to show data.

The table shows the lengths of objects in inches.
Use the data from the table to make a line plot.

Object	Length in Inches
Pencil	5
Scissors	8
Stapler	6



The line plot helps you see which object is shortest and which one is longest.




家庭活动 Use the line plot to ask your child questions about the data. Encourage your child to explain each answer.

Use the line plot above to answer the questions.

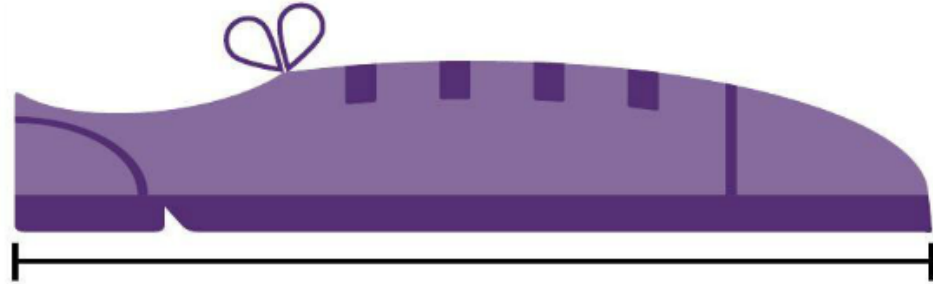
1. Which object is longest? _____
2. Which object is shortest? _____
3. How much shorter is the stapler than the scissors? _____
4. How much longer is the scissors than the pencil? _____

© **MP.6 Be Precise** Measure each shoe in inches. Then record each length in the table. Show each length on the line plot.

5. The green shoe is _____ long.



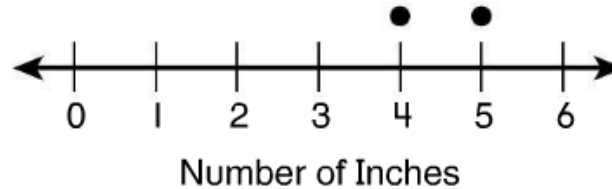
6. The purple shoe is _____ long.



7.

Shoe Color	Length in Inches
Blue	4
Red	5
Green	
Purple	

Lengths of Shoes



8. **Higher Order Thinking** Which three shoes have a total length of 13 inches? Explain.

9. © **Assessment** Measure the length of the yellow shoe in inches. Write the length below. Record your measurement on the line plot above.

