

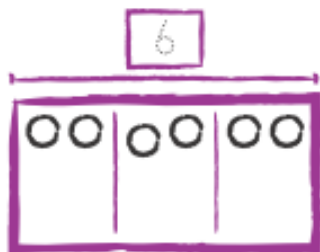
功课和练习

第2-5课

数学模型

再看! You can draw an array or bar diagram to model and help solve problems.

Terri has 3 baskets. Each basket has 2 toys.
How many toys does Terri have in all?




The equation
 $2 + 2 + 2 = 6$
also models the
problem.

So, Terri has 6 toys in all.




家庭活动 Have your child draw an array and then write an equation to model this problem: Joel has 2 bags. Each bag has 3 apples. How many apples does Joel have in all?



Draw an array or bar diagram to help you solve each problem. Then write an equation.

1. Beth has 3 rows of sunflowers in her garden. Each row has 5 flowers. How many sunflowers does Beth have in all?



_____ + _____ + _____ = _____ sunflowers

2. Curtis makes 2 books. Each book has 7 pages. How many pages does Curtis make in all?



_____ + _____ = _____ pages

© Performance Assessment

Planting Flowers

Mrs. Dunlap is planting some flowers in her garden. She has 10 tulips, 5 roses, and 10 daffodils. She wants to plant the flowers in an array, where each row has 5 flowers. How many rows of flowers will be in her garden?



3. **MP.1 Make Sense** What do you know? What are you asked to find?

4. **MP.3 Explain** Mrs. Dunlap thinks she should plant the flowers in 4 rows of 5 flowers. Does her plan make sense? Explain why or why not.

5. **MP.4 Model** Draw an array to show how Mrs. Dunlap should plant her flowers. Label the flowers. How many rows are in her garden?