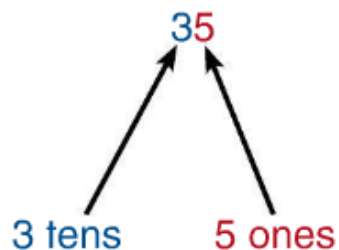


功课和练习 第5-3课

继续在数字线上
倒数,进行减法
计算

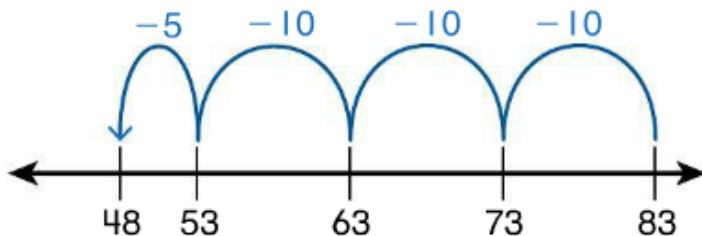
家庭活动 Tell your child a subtraction story for $36 - 15$. Have your child draw an open number line and use it to solve the problem.

再看! Find $83 - 35$.



How many tens and ones do you need to subtract?

First place 83 on an open number line. Then count back 3 tens and 5 ones to subtract 35.



So, $83 - 35 = 48$.



Use an open number line to find each difference.

1. $95 - 23 = \underline{\quad}$



2. $30 - 15 = \underline{\quad}$



© **MP.5 Use Tools** Use an open number line to solve each problem.

3. $87 - 23 =$ _____



4. $54 - 19 =$ _____



5. Joe has 43 grapes. He gives 17 grapes to Dee. How many grapes does Joe have left?



_____ grapes

6. Izzy has 99 bottle caps. She gives 33 to Max. How many bottle caps does Izzy have left?

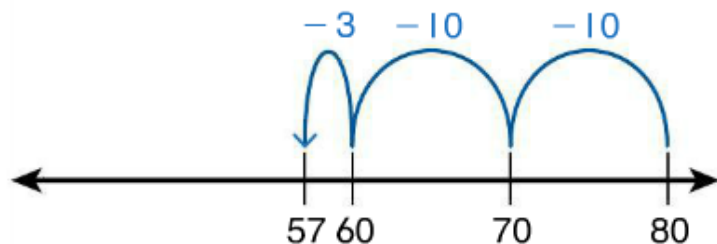


_____ bottle caps

7. **Higher Order Thinking** Write a story problem for $36 - 14$. Draw and use an open number line to solve the problem.



8. © **Assessment** Manuel solved a subtraction problem using the open number line shown. Write the equation his open number line shows.



_____ - _____ = _____