

# 功课和练习 第5-5课

分割数字来做  
减法

再看！ Find  $55 - 8$ .

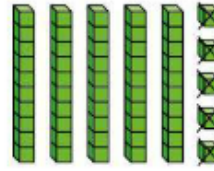


You can break apart 8 to find  $55 - 8$ .

One way is  $8 = 5 + 3$ .

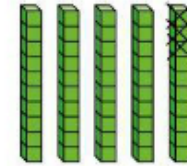


There is a 5 in the ones place in 55. It's easy to subtract  $55 - 5$ .



$$\underline{55} - \underline{5} = \underline{50}$$

Next, subtract  $50 - 3$ . You can count back 3 from 50.



$$\underline{50} - \underline{3} = \underline{47}$$

So,  $55 - 8 = \underline{47}$ .

家庭活动 Ask your child to show you how to break apart the 5 in  $43 - 5$  to find the difference.



Subtract. Break apart the number you are subtracting. Show your work.

1.  $65 - 9 = \underline{\quad}$

2.  $24 - 7 = \underline{\quad}$

3.  $\underline{\quad} = 84 - 8$

© **MP.3 Explain** Subtract. Break apart the number you are subtracting. Show your work to explain your thinking.

4.  $41 - 5 = \underline{\hspace{2cm}}$

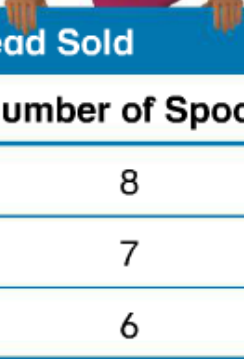
5.  $\underline{\hspace{2cm}} = 94 - 8$

6.  $25 - 9 = \underline{\hspace{2cm}}$

7. **Higher Order Thinking** The table shows how many spools of thread Smith's Fabric Store sold on Monday.

Before the sale, there were 34 red spools and 53 black spools. How many red spools were left at the end of Monday? How many black spools were left?

$\underline{\hspace{2cm}}$  red spools  $\underline{\hspace{2cm}}$  black spools



Spools of Thread Sold	
Thread Color	Number of Spools
Red	8
Blue	7
Black	6

8. © **Assessment** Ron has 21 comic books. He sells 6 of them to a friend. How many comic books does Ron have now?

(A) 17

(C) 15

(B) 16

(D) 14

9. © **Assessment** Yelena has 5 animal stickers. Vera has 41 animal stickers. How many fewer animal stickers does Yelena have than Vera?

(A) 26

(C) 35

(B) 34

(D) 36