

# 功课和练习 第9-4课


会读和会写 3 位数的数字

**再看！** You can write and show numbers in different ways.

**Expanded form** uses plus signs to show hundreds, tens, and ones.

$$200 + 60 + 4$$

You can draw models to show the expanded form.



The **word form** is two hundred sixty-four.

The **standard form** is 264.

**家庭活动** Say a three-digit number, such as eight hundred fifty-one. Write it down in word form. Ask your child to write the number in both standard form and expanded form.



Solve each problem.

1. Draw models to show the expanded form. Write the number in standard form.

$$400 + 30 + 8$$

four hundred thirty-eight

\_\_\_\_\_

2. Write the number in expanded form and standard form.

three hundred fifty-four



\_\_\_\_\_ + \_\_\_\_\_ + \_\_\_\_\_  
 \_\_\_\_\_

3. **A-Z Vocabulary** Write the number in **standard form**.

Then write it in **word form**.



$$400 + 70 + 8$$

\_\_\_\_\_

\_\_\_\_\_

4. **Assessment** 329 cars and 293 trucks are parked in a parking lot.

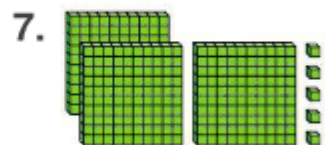
Which is the expanded form of the number of cars parked?

- (A)  $200 + 90 + 3$   
 (B)  $300 + 20 + 9$   
 (C)  $300 + 90 + 2$   
 (D)  $600 + 20 + 2$


**Higher Order Thinking** Use the clues to complete the number puzzle.

**Across**

5.  $500 + 20 + 3$



9.  $400 + 20 + 9$




13. Two hundred sixty-nine

**Down**

6.  $300 + 40 + 7$

7. Three hundred ninety-seven

8.  $500 + 60 + 9$



12. Four hundred thirty-eight

5		6		7		8
		9				
10	11				12	
	13					